


Homework & Practice 1-6

Think Addition to Subtract

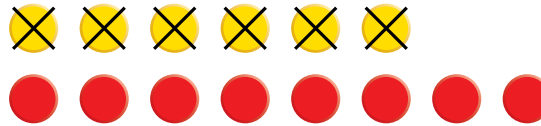
Another Look! Addition facts can help you subtract.
Use the pictures to find the missing numbers.

Addition Fact



Think $6 + \underline{8} = 14$.

Subtraction Fact




So, $14 - 6 = \underline{8}$.

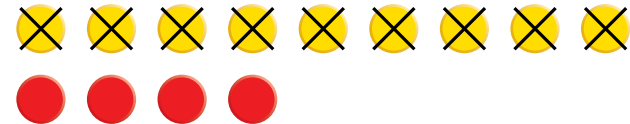
HOME ACTIVITY Make up problems during daily activities such as, "If I have 12 eggs and I use 3 of them, how many eggs do I have left?" Have your child write and solve the subtraction sentence using addition facts.




Addition facts can help you subtract.
Use the pictures to find the missing numbers.




Think $9 + \underline{\quad} = 13$.



So, $13 - 9 = \underline{\quad}$.



Think $8 + \underline{\quad} = 17$.



So, $17 - 8 = \underline{\quad}$.

Higher Order Thinking Circle the addition fact that will help you subtract.
Write an equation to solve each problem.

3. Lucy had 12 books. She gave 3 books to Michael. How many books does Lucy have now?

$$3 + 12$$

$$3 + 9$$

$$6 + 6$$

$$\underline{\quad} - \underline{\quad} = \underline{\quad}$$

 books

4. Pam has 20 marbles. She puts 10 marbles in a jar. How many marbles are **NOT** in the jar?

$$20 + 10$$

$$9 + 9$$

$$10 + 10$$

$$\underline{\quad} - \underline{\quad} = \underline{\quad}$$

 marbles

Think about
the parts and
the whole.



5. **MP.8 Generalize** Subtract. Write the addition fact that can help you.

$$19 - 9 = \underline{\quad}$$

$$9 + \underline{\quad} = 19$$

How do addition facts help you subtract?

6. **Assessment** Maria has 11 rings. She loses 3 rings. Which addition fact can help you find how many rings Maria has left?

$$3 + 1 = 4$$

(A)

$$6 + 5 = 11$$

(C)

$$3 + 8 = 11$$

(B)

$$2 + 9 = 11$$

(D)